



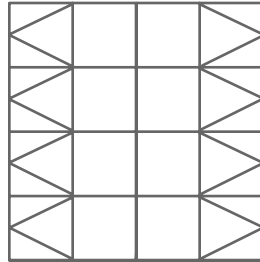
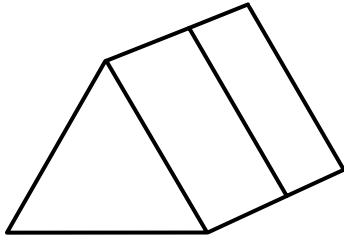

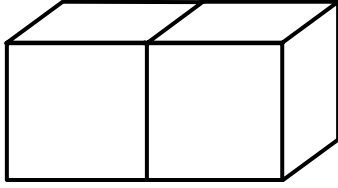
Sten, We Have a Polygon

Activity Sheet

Name: _____ Class: _____

Draw a net for each shape using the grid.

1



There are 11 different nets that will form a cube.

How many can you make?

Shade in the nets on the grid below.

One has been done for you.

2

